

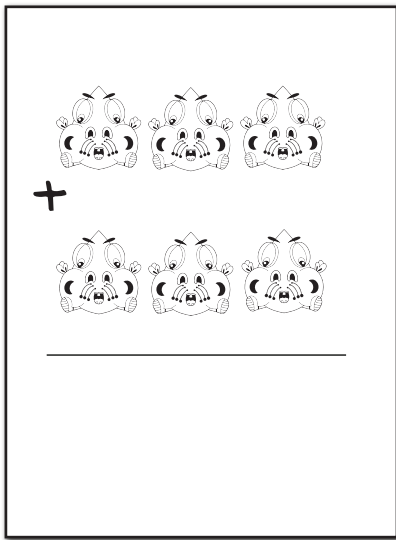


I ♥ My Teeth

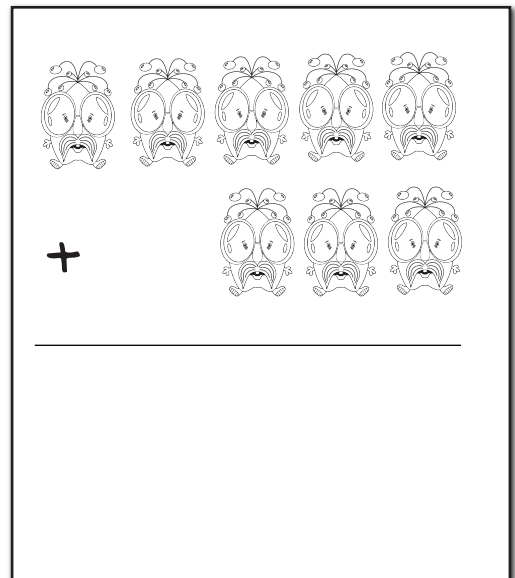


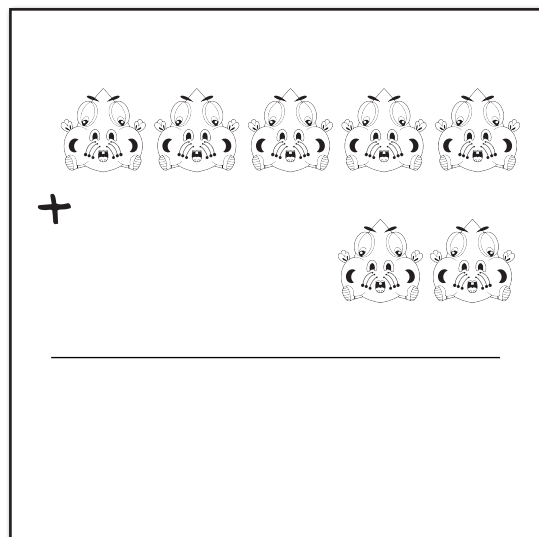
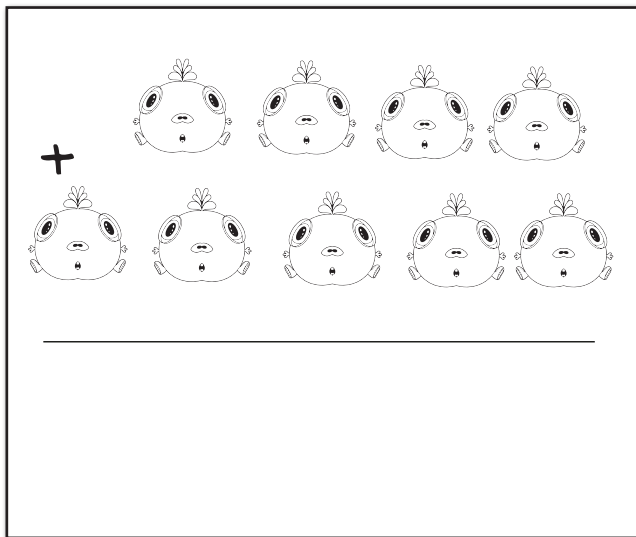
Sugar Bug Math

a school workbook
all about teeth by

THE **Tooth**
Doctors
FAMILY & COSMETIC DENTISTRY



sugar bugs add up quickly



When Sugar Bugs aren't brushed
out of your mouth, they multiply

$7 \times 5 =$

$8 \times 3 =$

$4 \times 7 =$

$2 \times 4 =$

$7 \times 9 =$

$9 \times 6 =$

$5 \times 5 =$

$6 \times 4 =$

$3 \times 9 =$

$2 \times 8 =$

$6 \times 6 =$

$4 \times 3 =$

$5 \times 3 =$

$4 \times 2 =$

$7 \times 1 =$

$3 \times 3 =$

$5 \times 6 =$

$7 \times 8 =$

$3 \times 6 =$

$5 \times 2 =$


$6 \times 8 =$

$1 \times 9 =$

















$9 \times 8 =$

$4 \times 6 = 24$



THE **Tooth**
Doctors
FAMILY & COSMETIC DENTISTS




Brush your teeth and get rid of those sugar bugs

  _____ - _____ = <input type="text"/>	  _____ - _____ = <input type="text"/>
  _____ - _____ = <input type="text"/>	  _____ - _____ = <input type="text"/>
  _____ - _____ = <input type="text"/>	  _____ - _____ = <input type="text"/>
  _____ - _____ = <input type="text"/>	  _____ - _____ = <input type="text"/>

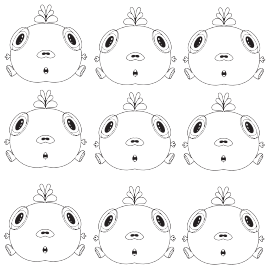
Oh No! I forgot to brush my teeth before bed!
The Sugar bugs are adding up!





$$\underline{\hspace{2cm}} + \underline{\hspace{2cm}} = \boxed{\hspace{2cm}}$$



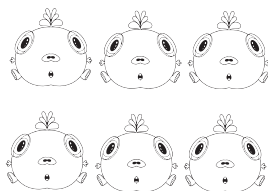

$$\underline{\hspace{2cm}} + \underline{\hspace{2cm}} = \boxed{\hspace{2cm}}$$




$$\underline{\hspace{2cm}} + \underline{\hspace{2cm}} = \boxed{\hspace{2cm}}$$




$$\underline{\hspace{2cm}} + \underline{\hspace{2cm}} = \boxed{\hspace{2cm}}$$




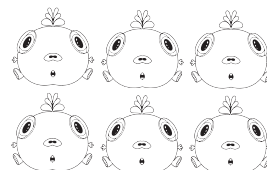
$$\underline{\hspace{2cm}} + \underline{\hspace{2cm}} = \boxed{\hspace{2cm}}$$



$$\underline{\hspace{2cm}} + \underline{\hspace{2cm}} = \boxed{\hspace{2cm}}$$



$$\underline{\hspace{2cm}} + \underline{\hspace{2cm}} = \boxed{\hspace{2cm}}$$




$$\underline{\hspace{2cm}} + \underline{\hspace{2cm}} = \boxed{\hspace{2cm}}$$

Meet the Sugar Bugs!

Sugar bugs are actually bacteria that live on your teeth. They like to eat sugar and when they do, they start to really add up. Brushing and flossing your teeth every day is one of the most effective ways to get rid of these bugs. Eating and drinking less sugar is another way to cut down on these bacteria. If you do eat or drink sugar (because let's face it, we all love a little sugar sometimes) rinse your mouth with water or brush your teeth right after, if you can. These guys may look cute here, but they can actually cause cavities and gum disease. If you make brushing everyday a habit, you will be able to keep your beautiful smile healthy!

Hi! We are the sugar bugs.
Harry, Larry, Mary, and Terry



Tooth Fairy Math

The Tooth Fairy is GREAT at collecting teeth but she needs some help counting the teeth and money she spent. Help the tooth fairy keep track of her teeth and money.

1. Lily gets \$1 for each of her teeth that she puts under her pillow. She got \$5 for her first tooth and so far she lost 3 teeth. How much money has the tooth fairy given Lily?
2. The Story family has 3 children. 2 girls and 1 boy. Kaylee has lost 5 teeth so far, Alice lost 3 teeth and Eli lost 1. How many teeth has the tooth fairy collected from the Story family?
3. The tooth fairy only had some coins when she visited Jake to pick up the first tooth that came out. She left him 13 quarters, 6 dimes, and 3 nickles. How much money did Jake get for his first tooth?
4. Hannah gets 50 cents for each tooth that she loses. 6 teeth have come out so far but she forgot to leave one for the tooth fairy. How much money has the tooth fairy left for Hannah?
5. The Stiles family gets 1 dollar for each tooth. Jasper lost 4 teeth but one had a cavity (he did not get money for that one). His sister lost 2 teeth and got money for both. How much money has the tooth fairy left for the Stiles family?